

Year 1 Spring 1 Maths Activity Mat 2

Section 1

14 is 5 more than which number? Tick the answer.

8 **11** **9**


<input type="checkbox"/>	<input type="checkbox"/>	<input type="checkbox"/>
--------------------------	--------------------------	--------------------------



Section 2

Draw 6 more snowflakes.

How many do you have altogether?



Section 3

$$13 - 8 = \square$$

$$14 + 9 = \square$$

$$15 - 6 = \square$$

Section 4


Millie spends £3.50.

How much does she have left?



Section 5

Group the butterflies in twos.
How many groups are there?
How many were left over?



Section 6

Circle the odd numbers.


23 10

18

14 11

Section 7

Draw an even number of spots on the leopard. Draw no more than 11 spots!



Section 8

What is the missing number?

15, 20, 25, ?, 35, 40, 45.



Year 1 Spring 1 Maths Activity Mat 2 Answers

Section 1

14 is 5 more than which number? Tick the answer.

8

11


9



Section 2

Draw 6 more snowflakes.

How many do you have altogether?



19

Section 3

$$13 - 8 = 5$$

$$14 + 9 = 23$$

$$15 - 6 = 9$$

Section 4

Millie spends £3.50.

How much does she have left?



£3

Section 5

Group the butterflies in twos. How many groups are there? How many were left over?



8

1

Section 6

Circle the odd numbers.

23

10

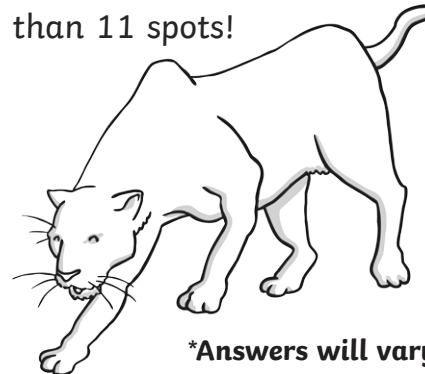
18

14

11

Section 7

Draw an even number of spots on the leopard. Draw no more than 11 spots!



*Answers will vary

Section 8

What is the missing number?

15, 20, 25, ?, 35, 40, 45.

30



Year 1 Spring 1 Maths Activity Mat 2

Section 1

Which number is 3 more than 6? Tick the answer.

7

10


9



Section 2

Draw 3 more snowflakes.

How many do you have altogether?



Section 3

$8 + 2 = \square$

$6 - 3 = \square$

$4 + 5 = \square$

Section 4

Will spends 4 £1 coins.


How much does he have left?



Section 5

Group the butterflies in twos.

How many groups are there?



Section 6

Circle the even numbers.


12 6

9

4 7

Section 7

Draw 7 spots onto the leopard.



Section 8

What is the missing number?

11, 12, 13, 14, ?, 16, 17.



Year 1 Spring 1 Maths Activity Mat 2 Answers

Section 1

Which number is 3 more than 6? Tick the answer.


7 **10** **9**



Section 2

Draw 3 more snowflakes.

How many do you have altogether?



Section 3

$$8 + 2 = 10$$

$$6 - 3 = 3$$

$$4 + 5 = 9$$

Section 4

Will spends 4 £1 coins.


How much does he have left?



Section 5

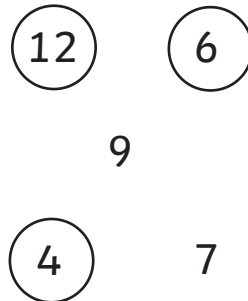
Group the butterflies in twos.

How many groups are there?




Section 6

Circle the even numbers.



Section 7

Draw 7 spots onto the leopard.



Section 8

What is the missing number?

11, 12, 13, 14, ?, 16, 17.

15



Year 1 Spring 1 Maths Activity Mat 2

Section 1

Which number is 5 more than 7? Tick the answer.

12 **14** **10**


<input type="checkbox"/>	<input type="checkbox"/>	<input type="checkbox"/>
--------------------------	--------------------------	--------------------------



Section 2

Draw 4 more snowflakes.

How many do you have altogether?



Section 3

$$7 + 4 = \square$$

$$9 - 6 = \square$$

$$4 + 8 = \square$$

Section 4

Aliyan spends 6 £1 coins.

How much does he have left?



Section 5

Group the butterflies in twos.

How many groups are there?



Section 6

Circle the even numbers.


14 5

11

18 8

Section 7

Draw 11 spots onto the leopard, putting at least 2 on his head.



Section 8

What is the missing number?

20, 30, 40, ?, 60, 70.



Year 1 Spring 1 Maths Activity Mat 2 Answers

Section 1

Which number is 5 more than 7? Tick the answer.


12 **14** **10**



Section 2

Draw 4 more snowflakes.

How many do you have altogether?



12

Section 3

$$7 + 4 = \boxed{11}$$

$$9 - 6 = \boxed{3}$$

$$4 + 8 = \boxed{12}$$

Section 4

Aliyan spends 6 £1 coins.

How much does he have left?



Section 5

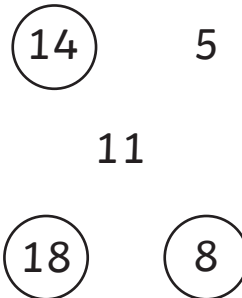
Group the butterflies in twos.

How many groups are there?




Section 6

Circle the even numbers.



Section 7

Draw 11 spots onto the leopard, putting at least 2 on his head.



Section 8

What is the missing number?

20, 30, 40, ?, 60, 70.

50



Year 1 Spring 1 Maths Activity Mat 2

Section 1

Which number is 3 more than 6? Tick the answer.

7 **10** **9**


<input type="checkbox"/>	<input type="checkbox"/>	<input type="checkbox"/>
--------------------------	--------------------------	--------------------------



Section 2

Draw 3 more snowflakes.

How many do you have altogether?



<input type="checkbox"/>

Section 3

$$8 + 2 = \boxed{}$$

$$6 - 3 = \boxed{}$$

$$4 + 5 = \boxed{}$$

Section 4

Will spends 4 £1 coins.

How much does he have left?




<input type="checkbox"/>

Section 5

Group the butterflies in twos.

How many groups are there?



<input type="checkbox"/>

Section 6

Circle the even numbers.


12 6

9

4 7

Section 7

Draw 7 spots onto the leopard.



Section 8

What is the missing number?

11, 12, 13, 14, ?, 16, 17.

<input type="checkbox"/>



Year 1 Spring 1 Maths Activity Mat 2

Section 1

Which number is 5 more than 7? Tick the answer.

12 **14** **10**


<input type="checkbox"/>	<input type="checkbox"/>	<input type="checkbox"/>
--------------------------	--------------------------	--------------------------



Section 2

Draw 4 more snowflakes.

How many do you have altogether?



Section 3

$$7 + 4 = \square$$

$$9 - 6 = \square$$

$$4 + 8 = \square$$

Section 4

Aliyan spends 6 £1 coins.

How much does he have left?



Section 5

Group the butterflies in twos.

How many groups are there?



Section 6

Circle the even numbers.


14 5

11

18 8

Section 7

Draw 11 spots onto the leopard, putting at least 2 on his head.



Section 8

What is the missing number?

20, 30, 40, ?, 60, 70.



Year 1 Spring 1 Maths Activity Mat 2

Section 1

14 is 5 more than which number? Tick the answer.


8 **11** **9**



Section 2

Draw 6 more snowflakes.

How many do you have altogether?



Section 3

$$13 - 8 = \square$$

$$14 + 9 = \square$$

$$15 - 6 = \square$$

Section 4


Millie spends £3.50.

How much does she have left?



Section 5

Group the butterflies in twos.
How many groups are there?
How many were left over?



Section 6

Circle the odd numbers.


23 10

18

14 11

Section 7

Draw an even number of spots on the leopard. Draw no more than 11 spots!



Section 8

What is the missing number?

15, 20, 25, ?, 35, 40, 45.



Year 1 Spring 1 Maths Activity Mat 2 Answers

Section 1

Which number is 3 more than 6? Tick the answer.


7 10 9



Section 2

Draw 3 more snowflakes.

How many do you have altogether?



Section 3

$$8 + 2 = 10$$

$$6 - 3 = 3$$

$$4 + 5 = 9$$

Section 4

Will spends 4 £1 coins.


How much does he have left?



Section 5

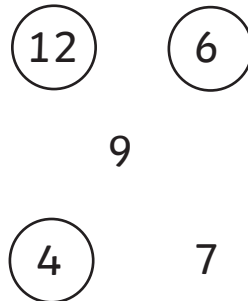
Group the butterflies in twos.

How many groups are there?




Section 6

Circle the even numbers.



Section 7

Draw 7 spots onto the leopard.



Section 8

What is the missing number?

11, 12, 13, 14, ?, 16, 17.

15



Year 1 Spring 1 Maths Activity Mat 2 Answers

Section 1

Which number is 5 more than 7? Tick the answer.


12 **14** **10**



Section 2

Draw 4 more snowflakes.

How many do you have altogether?



12

Section 3

$$7 + 4 = \boxed{11}$$

$$9 - 6 = \boxed{3}$$

$$4 + 8 = \boxed{12}$$

Section 4

Aliyan spends 6 £1 coins.

How much does he have left?



Section 5

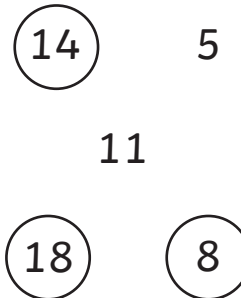
Group the butterflies in twos.

How many groups are there?




Section 6

Circle the even numbers.



Section 7

Draw 11 spots onto the leopard, putting at least 2 on his head.



Section 8

What is the missing number?

20, 30, 40, ?, 60, 70.

50



Year 1 Spring 1 Maths Activity Mat 2 Answers

Section 1

14 is 5 more than which number? Tick the answer.

8

11


9



Section 2

Draw 6 more snowflakes.

How many do you have altogether?



19

Section 3

$$13 - 8 = 5$$

$$14 + 9 = 23$$

$$15 - 6 = 9$$

Section 4

Millie spends £3.50.

How much does she have left?



£3

Section 5

Group the butterflies in twos. How many groups are there? How many were left over?



8

1

Section 6

Circle the odd numbers.

23

10

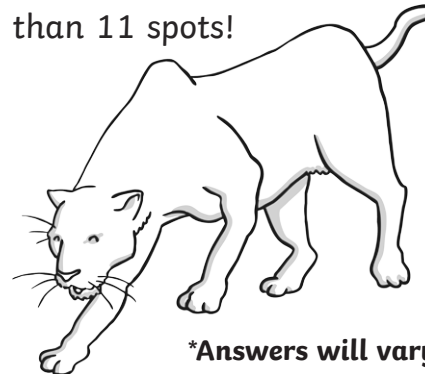
18

14

11

Section 7

Draw an even number of spots on the leopard. Draw no more than 11 spots!



*Answers will vary

Section 8

What is the missing number?

15, 20, 25, ?, 35, 40, 45.

30

